

Rang a 6- Múinteoir Rachel 20/04/20 - 24/05/20

Dia daoibh Rang a 6,

Tá súil agam go raibh briseadh deas agaibh a bhí lán le seacláid. Ba bhreá liom a bheith ar ais ar scoil ag éisteacht le bhúr scéalta ar fad is chuile rud eile ach is cosúil go bhfuil orainn fanacht tamallín eile. ☹ Tá go leor obair anseo agus beidh sibh gnóthach. **Déan an méid is gur féidir libh. Tá gach teach agus clann difriúil. Nílím ach ag lorg d'iarracht is fearr.** ☺ Déan iarracht d'obair a dhéanamh idir 9:00 agus 3:00 gach lá, glac sos ó 10:30-10:50 agus arís ó 12:30-1:00. Ná déan aon obair déanach san oíche. Bhí sibh ar fad an-chabrach ar scoil mar sin lean ar aghaidh le sin is bí cabhrach sa bhaile. Airím uaim go mór sibh!!

Slán go fóill,

Múinteoir Rachel ☺

20/04/20	21/04/20	22/04/20	23/04/20	24/04/20
MM W29 Luan Táblaí x1 - x3 EinP Day 107 Just Handwriting 1pg Leabhar don Chóineartú Ag Campáil Ich 40-42 Gaeilge Ceisteanna A (thíos) R. Ahead read p244-252 Bil. Mata p157 1, 2	MM W29 Máirt Táblaí x4 - x6 EinP Day 108 Just Handwriting 1pg Reiligiún Fís 1 Ag Campáil Ich 40-42 R. Ahead p254 C, D Bil. Mata p157 3, 4 Eolaíocht/ Tír Eol. An Domhan	MM W29 Céadaoin Táblaí x5 - x7 EinP Day 109 Just Handwriting 1pg Leabhar don Chóineartú Ag Campáil Ich 40-42 Gaeilge Ceisteanna B (thíos) R. Ahead p254/255 E, F Bil. Mata p158 1, 2 Stair - Fís	MM W29 Déardaoin Táblaí x8 - x9 EinP Day 110 Just Handwriting 1pg Reiligiún Fís 2 Ag Campáil Ich 40-42 R. Ahead p253, p255 G Bil. Mata p158 3-6 Eolaíocht/ Tír Eol. An Grianchóras	MM W29 Aoine + PS Táblaí x10 - x12 EinP p87 Just Handwriting 1pg Leabhar don Chóineartú Ag Campáil Ich 40-42 R. Ahead p255 H Bil. Mata p134 7-10 Ealaín (bláthanna)

Obair Breise:

Spórt - The Body Coach Joe Wicks gach maidin ag 9:00r.n. ach bíonn na físeanna ar fad ar YouTube <https://www.youtube.com/user/thebodycoach1>

Cúla4 ar Scoil - Gach lá ó 10:00-10:30 ar TG4

School TV- Gach lá ó 11:00-12:00 ar RTÉ2

Bí ag léamh!!- Keep up your reading at home.

MATA (Ní dóigh liom go bhfuil bhúr gcóipleabhair agaibh, déanigí na ceistanna seo i bhúr refill pads nó is féidir iad a phriondail.)

Fís ar Imlíne agus Achar -

https://drive.google.com/open?id=13jVAmD_rS_8UupMWAdOs8wDmKmGC-pCj


Topic

18

Area – Alternative Questions


1. Draw rectangles with the following areas. Find the perimeter of each rectangle you have drawn.

- (a) 8cm^2 (b) 10cm^2 (c) 12cm^2 (d) 15cm^2 (e) 16cm^2 (f) 21cm^2



2. Draw rectangles with the following perimeters. Find the area of each rectangle you have drawn.

- (a) 4cm (b) 8cm (c) 10cm (d) 18cm (e) 20cm (f) 26cm



3. Find the area and perimeter of each of these rectangles.

- (a) L 10cm, W 5cm: ____ (b) L 8cm, W 7cm: ____ (c) L 11cm, W 3cm: ____
(d) L 12cm, W 10cm: ____ (e) L 20cm, W 16cm: ____ (f) L 32cm, W 25cm: ____

4. Find the area and perimeter of each of these squares.

- (a) L 7cm: ____ (b) L 9cm: ____ (c) L 11cm: ____
(d) L 15cm: ____ (e) L 22cm: ____ (f) L 44cm: ____

Name: _____ Date: _____

1. In your head. Calculate the area of these rectangles.

- (a) L 15m W 6m: _____ (b) L 20m W 12m: _____ (c) L 15m W 10m: _____
 (d) L 11m W 3m: _____ (e) L 12m W 8m: _____ (f) L 40m W 20m: _____
 (g) L 5m W $\frac{1}{2}$ m: _____ (h) L 6m W $\frac{1}{4}$ m: _____ (i) L 0.5m W 0.4m: _____

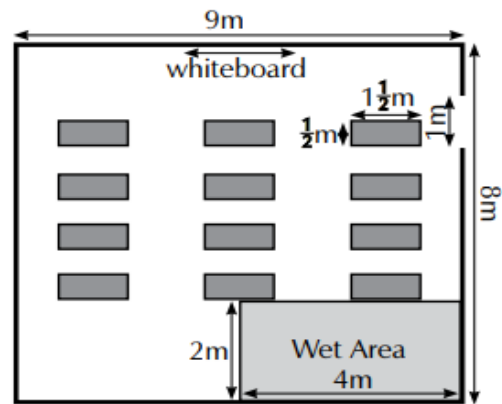
2. Find the area of these rectangles. You are given the perimeter and the length.

- (a) P 10m L 4m: _____ (b) P 14m L 5m: _____ (c) P 20m L 7m: _____
 (d) P 28m L 10m: _____ (e) P 30m L 10m: _____ (f) P 40m L 15m: _____
 (g) P 4m L $1\frac{1}{2}$ m: _____ (h) P 6m L $2\frac{1}{2}$ m: _____ (i) P 9m L 3m: _____

3. Answer the questions.

- (a) A square garden is 20m long. There is a square flower bed which is 6m long in the centre of the garden. What is the area of the garden around the flower bed? _____
 (b) A cube has edges measuring 8m. What is the surface area of the cube? _____
 (c) A cuboid has edges measuring 6m by 5m by 3m. What is the surface area? _____

4. Look at the plan of a classroom.



- (a) What is the area of the classroom? _____
 (b) What is the area of the 'wet area'? _____
5. (a) What is the surface area of one desk? _____
 (b) What is the surface area of all of the desks? _____
6. All of the classroom has carpet except for the wet area. What is the area of the carpet? _____

7. A classroom projector is built into the ceiling. It is situated $2\frac{1}{2}$ m from the whiteboard. Estimate its position and place an X on the plan to represent the projector.
8. What is the perimeter of the room, including the door? _____
9. What is the perimeter of the carpeted part of the room, including the door? _____
10. Six classrooms like this one are in a line. A 2m wide corridor runs alongside the classrooms, adjacent to the door. What is the area of the corridor? _____

Name: _____ Date: _____

GAEILGE Ceisteanna (Scéalta ón leabhar 'Ag Campáil')

Ceisteanna A: An Cárta Nollag

- Cén pictiúr a tharraing Ciarán don chomórtas?
- Cén áit sa scoil ina raibh na pictiúir ar taispeáint?
- Cén fáth a raibh an-bhród ar Chiarán?
- Cé a thug an duais do Chiarán?
- Cuir na focail/ frásaí seo in abairtí:
 - Tar éis cúpla lá ...
 - Ag deireadh na míosa ...
 - An tseachtain ina dhiaidh sin ...

Ceisteanna B: Bronntanas Nollag

- Cén fáth a raibh maratón cniotála agus crannchur sa scoil?
- Cathain a bhí an maratón ar siúl?
- Cé a rinne an chniotáil?
- Cad a rinne máthair Léan as na cearnóga cniotáilte?
- Cé mhéad airgid a bhailigh na páistí do Charthanacht V de P?

BÉARLA

To help with H on p255 look at the example below. Try and write around 20 lines of dialogue between the characters.

In groups of four, five or six write a short drama for the animals who are celebrating their success in the battle with the humans. All of the animals from the story should be in the drama. Give each animal at least one sentence to speak.

Trigger Questions / Words

- Make a list of all the animals.
- Group the animals in groups of 4 or 5.
- Have the animals in the group talking to each other.

Napoleon: "Listen dear pigeons. We need you to spread the news of the rebellion."

Snowball: "Make sure you tell all the animals."

Pigeons: "We certainly will."

Muriel: "I hear the farmers coming."

Benjamin: "Oh dear, what will we do?"

Napoleon: "Stay calm at all times."

Boxer: "Don't worry. I'll use my hind legs to kick them away from the farm."

REILIGIÚN

Fís 1: <https://drive.google.com/open?id=1McJGYvImlEm9oeD3brsh5kg2pX8UibQy>

Fís 2: <https://drive.google.com/open?id=1cDK-ZZK4VLn9qAekGuFXBtlqZUBGCBgP>

EALAÍN - Bláthanna

Lean as nasc chun an ceacht ealaíona a fheiceáil: <https://youtu.be/fhYxT1tcR4Q>
<https://youtu.be/ao2IP7f23-8>

STAIR *Rang a 6, there are 3 videos to watch for History. Some of you have already watched the first two on Class Dojo. For those who haven't watched any, watch them in order and try and answer the questions. There is a good bit of work here so don't worry if you can't watch them all at once. Some of the videos are to help you revise what we have already done in class.*

1. **Stair - 1916 (dul siar)** *Déan é muna bhfuil sé déanta agat ar Class Dojo*

Féach ar an bhfís agus déan iarracht na ceisteanna seo a fhreagairt. Labhraíonn an fear go tapaigh, b'fhéidir go mbeidh ort 'pause' a bhrú nó breathnú air cúpla uair.

1. Who lead a rebellion in Ireland in 1798?
2. What do the three colours in the Irish flag represent?
3. Why was Home Rule put on hold in 1914?
4. Why was Eoin MacNeill against the rising?
5. How were messages sent between the Irish forces?
6. How was James Connolly injured during the rising?
7. What two leaders avoided execution? Why weren't they killed?
8. Did the Irish soldiers get a heroes welcome when they came back from WW1? Why?
9. What statue can be found in the G.P.O.?

Fís:

<https://drive.google.com/open?id=1Rj9nruDi5j8BROu9vQgZGVMFxQZPFmNL>

2. **Stair - Cogadh na Saoirse (dul siar)** *Déan é muna bhfuil sé déanta agat ar Class Dojo*

Féach ar an bhfís agus déan iarracht na ceisteanna seo a fhreagairt. Labhraíonn an fear go tapaigh, b'fhéidir go mbeidh ort 'pause' a bhrú nó breathnú air cúpla uair.

N.B.: R.I.C. stands for the Royal Irish Constabulary which was the police force that was in Ireland during 1822-1922, when Ireland was part of the United Kingdom. The I.R.A. stands for the Irish Republican Army.

1. What is guerrilla warfare?
2. Why did many volunteers join Sinn Féin in 1917?
3. Who was the first ever woman to be elected as M.P. to the British Parliament?
4. When was the first Dáil Éireann held?
5. Who broke Éamon de Valera out of prison?
6. What county formed a socialist city where they printed their own money and newspapers?
7. How much money did Éamon de Valera raise in the U.S.A.?
8. Who were 'The Squad'?
9. Why were the R.I.C. known as 'The Black and Tans'?
10. Why did many prisoners go on hunger strike?
11. What happened on 21st November 1920? (2 events)
12. What name was given to 21st November 1920?
13. Who called for peace on the island of Ireland when opening the Northern Ireland

Parliament?

14. Name two people who travelled from Ireland to negotiate a treaty.

15. What was the name of the treaty?

Fís:

<https://drive.google.com/open?id=1CyyEC84jUQ7-KpKBHvGfx7SozSVIbGzi>

3. **Stair - An Cogadh Cathartha in Éireann** *Fís nua don rang ar fad*

Féach ar an bhfís agus déan iarracht na ceisteanna seo a fhreagairt. Labhraíonn an fear go tapaigh, b'fhéidir go mbeidh ort 'pause' a bhrú nó breathnú air cúpla uair.

N.B. There were two sides in the civil war Anti-Treaty (Republicans) and Pro-Treaty (Free State)

1. List two agreements that were set out in the Anglo-Irish Treaty.
2. Name two people who were anti-treaty.
3. Name two people who were pro-treaty.
4. Why did the Irish Civil war start?
5. On what date did the Irish Civil War start?
6. How long did the Battle of Dublin last?
7. What was Liam Lynch allowed to leave Dublin City after he was captured?
8. Who was Michael Collins' best friend before he became Éamon de Valera's right hand man?
9. Where was Michael Collins killed?
10. Were Cumann na mBan pro-treaty or anti-treaty?
11. Name two women elected to Dáil Éireann in 1921.
12. Who called a ceasefire in 1923 by asking all I.R.A. members to dump their arms and stop fighting?
13. Who was the leader of the Cumann na nGaedheal party?
14. Who was the leader of the Fianna Fáil party?
15. What did Cumann na nGaedheal change their name to?
16. In what year was Ireland/ Éire established?
17. In what year did Ireland become known as the 'Republic of Ireland'?

Fís:

https://drive.google.com/open?id=1-OCQXGJs_dnLD8igfQf3c3sIMnQLiwjY

EOLAÍOCHT/TÍR EOLAÍOCHT

An Domhan- Fís: <https://drive.google.com/open?id=1sjQEQzizhTKAynEAnE2iqH6dDJCqDYGX>

Féach ar an bhfís agus déan iarracht na ceisteanna seo a fhreagairt

1. What three things make up the Earth's structure?
2. What is the Earth's crust made of?
3. How many miles thick is the Earth's crust?
4. How thick is the mantle?
5. What is the outer core made of?
6. What is the hottest part of the Earth?

An Grianchóras- Fís: <https://drive.google.com/open?id=1Ikh8AQSNN6ziMpTo7f-xbN4edjB4k9zI>

Féach ar an bhfís agus déan iarracht na ceisteanna seo a fhreagairt

1. What is our galaxy called?
2. What is the main source of light for all of the planet?
3. Which is the hottest planet in the Solar System? Why?
4. What is another name given to Mars?
5. What is the name of Saturn's largest moon?
6. What planet is also known as the Ice Giant?